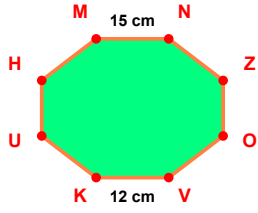
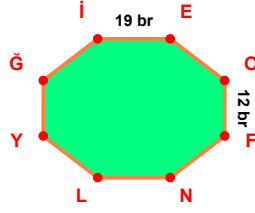


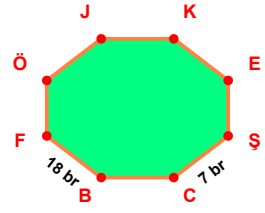
SORU: Aşağıdaki şekillerde verilen, kenar uzunlukları farklarını bulunuz.



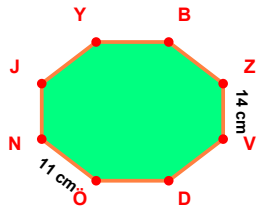
$$|MN| - |VK| = \dots\dots$$



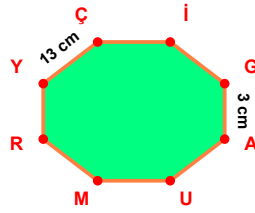
$$|İE| - |OF| = \dots\dots$$



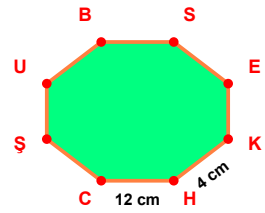
$$|BF| - |ŞC| = \dots\dots$$



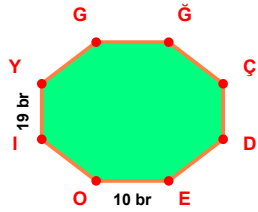
$$|ZV| - |ÖN| = \dots\dots$$



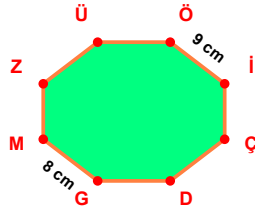
$$|YÇ| - |GA| = \dots\dots$$



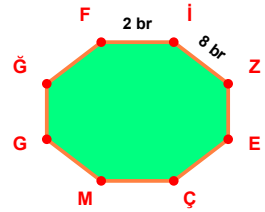
$$|HC| - |KH| = \dots\dots$$



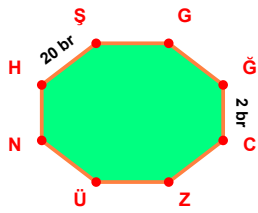
$$|İY| - |EO| = \dots\dots$$



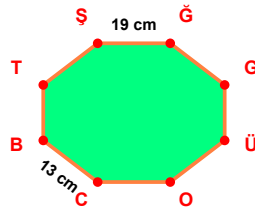
$$|Öİ| - |GM| = \dots\dots$$



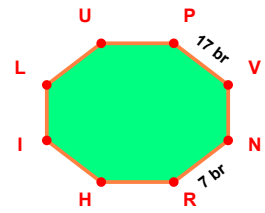
$$|İZ| - |Fİ| = \dots\dots$$



$$|HŞ| - |GC| = \dots\dots$$

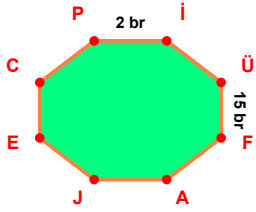


$$|ŞĞ| - |CB| = \dots\dots$$

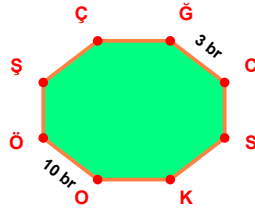


$$|PV| - |NR| = \dots\dots$$

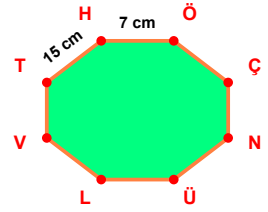
SORU: Aşağıdaki şekillerde verilen, kenar uzunlukları farklarını bulunuz.



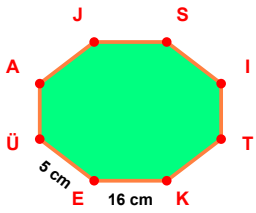
$$|ÜF| - |PI| = \dots\dots$$



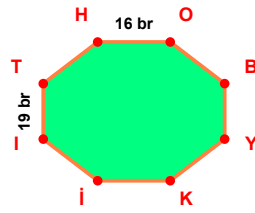
$$|ÖÖ| - |ĞC| = \dots\dots$$



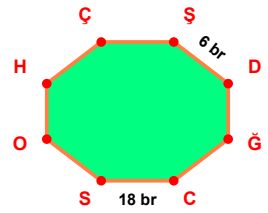
$$|TH| - |HÖ| = \dots\dots$$



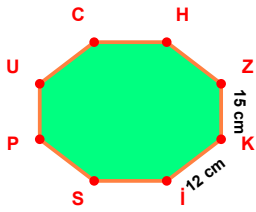
$$|KE| - |EÜ| = \dots\dots$$



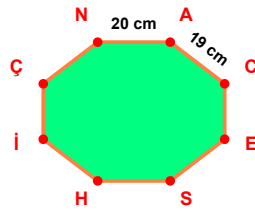
$$|IT| - |HO| = \dots\dots$$



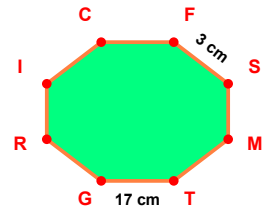
$$|CS| - |ŞD| = \dots\dots$$



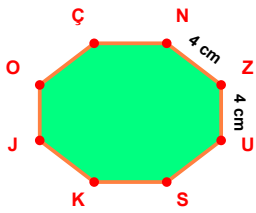
$$|ZK| - |KI| = \dots\dots$$



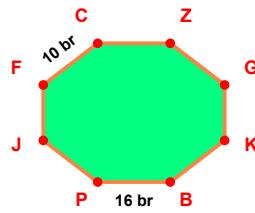
$$|NA| - |AC| = \dots\dots$$



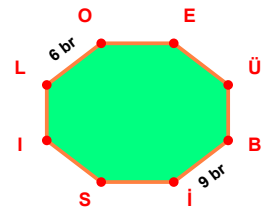
$$|TG| - |FS| = \dots\dots$$



$$|ZU| - |NZ| = \dots\dots$$



$$|BP| - |FC| = \dots\dots$$



$$|Bİ| - |LO| = \dots\dots$$

SÜREÇ ODAKLI DEĞERLENDİRME ÖLÇEĞİ

Doğru Sayısı: / 24

Öğretmen ilgili kutucuğu işaretler.

Geliştirilmeli (0-8)

İyi (9-14)

Çok İyi (15-20)

Mükemmel (21-24)

☐
☐
☐
☐

Hazırlayan:

Bu bölüme sınıfınızın ilgili kazanıma yönelik genel durumuna ilişkin gözlem ve izlenimlerinizi, öğrencilerinizin bu kazanımla ilgili öğrenme eksikliklerini ve bu eksikliklerin giderilmesi amacıyla yaptığınız/yapmayı planladığınız faaliyetleri not edebilirsiniz.

No	Adı - Soyadı	Toplam Puan	Değerlendirme
1			
2			
3			
4			
5			
6			
7			
8			
9			
10			
11			
12			
13			
14			
15			
16			
17			
18			
19			
20			
21			
22			
23			
24			
25			
26			
27			
28			
29			
30			
31			
32			
33			
34			
35			

Hazırlayan: